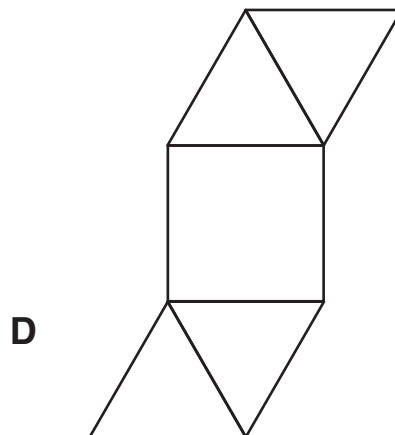
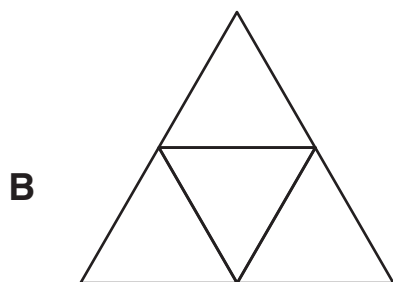
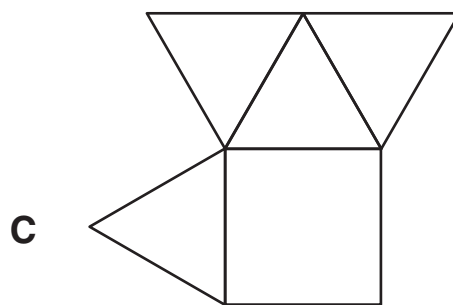
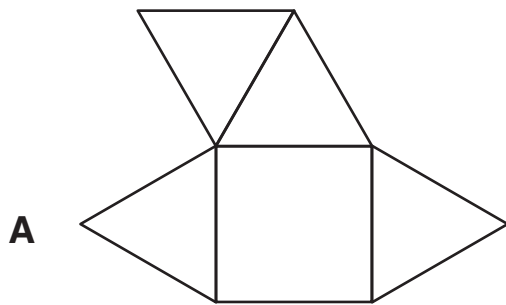


- 1** There are 170 pages in Soraya's book.
Soraya read the first 36 pages on Monday.
She read the next 20 pages on Tuesday.
How many pages are left?

A 56
B 114
C 124
D 134

- 2** Which net makes a square-based pyramid?



- 3** A jug contains $\frac{1}{2}$ L of water.
The water is shared equally among 5 children.
How much water does each child receive?

- A** $\frac{1}{10}$ L
B $\frac{1}{5}$ L
C $\frac{2}{5}$ L
D $\frac{5}{2}$ L

- 4** This clock shows the correct time.



Issam's watch shows



Issam's watch is

- A** 8 minutes slow.
B 12 minutes fast.
C 12 minutes slow.
D 8 minutes fast.